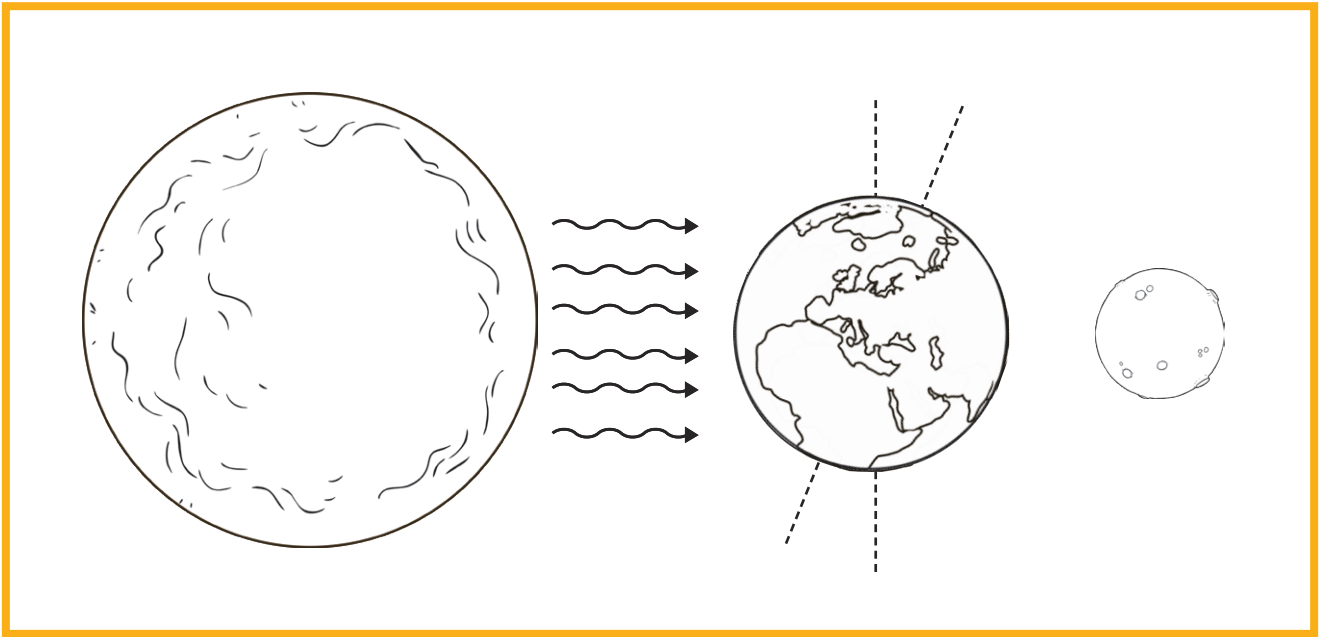


Why Do We Have Day and Night?



1. Label the **Earth**, **Sun** and **Moon** on the picture.
2. Can you explain why we have day and night by using the words in the box to complete each sentence?

We live on the planet _____.

Light comes from the _____.

The Earth _____ on its axis once each day.

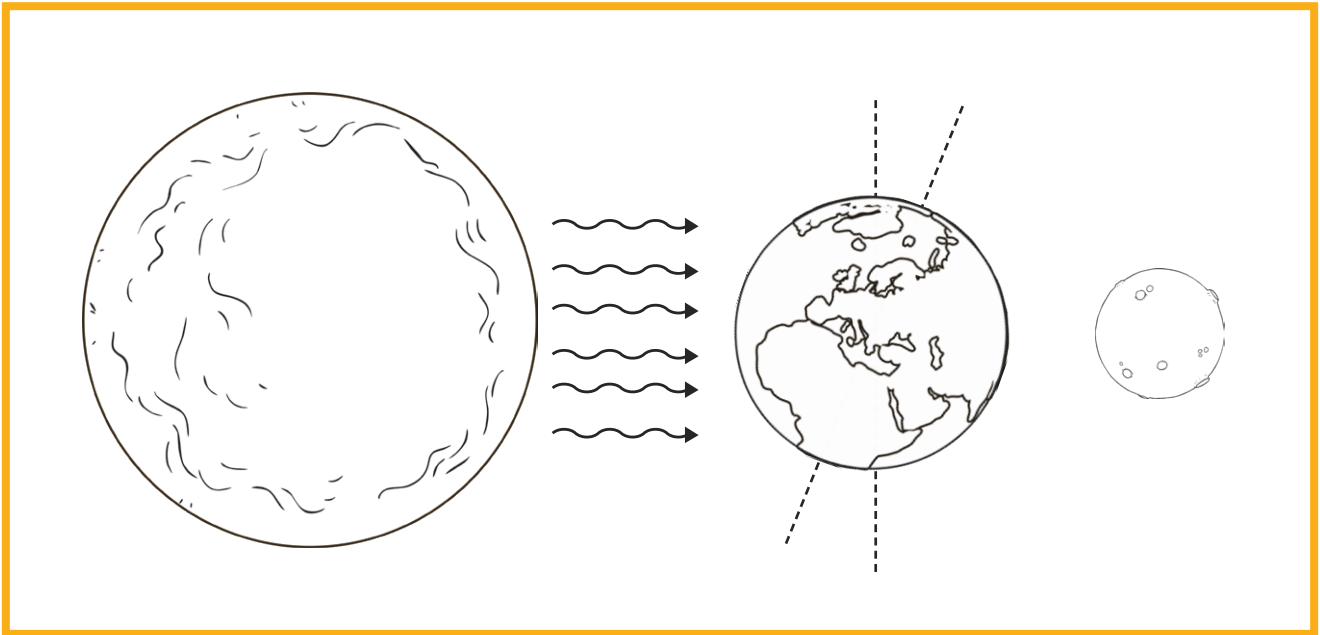
When the Sun shines on our part of the Earth, we are in _____.

When our part of the Earth spins away from the Sun we are in _____.

spins night-time daytime Sun Earth

3. Colour in the picture to show which part of the Earth is in daytime and which part is in night-time.

Why Do We Have Day and Night?



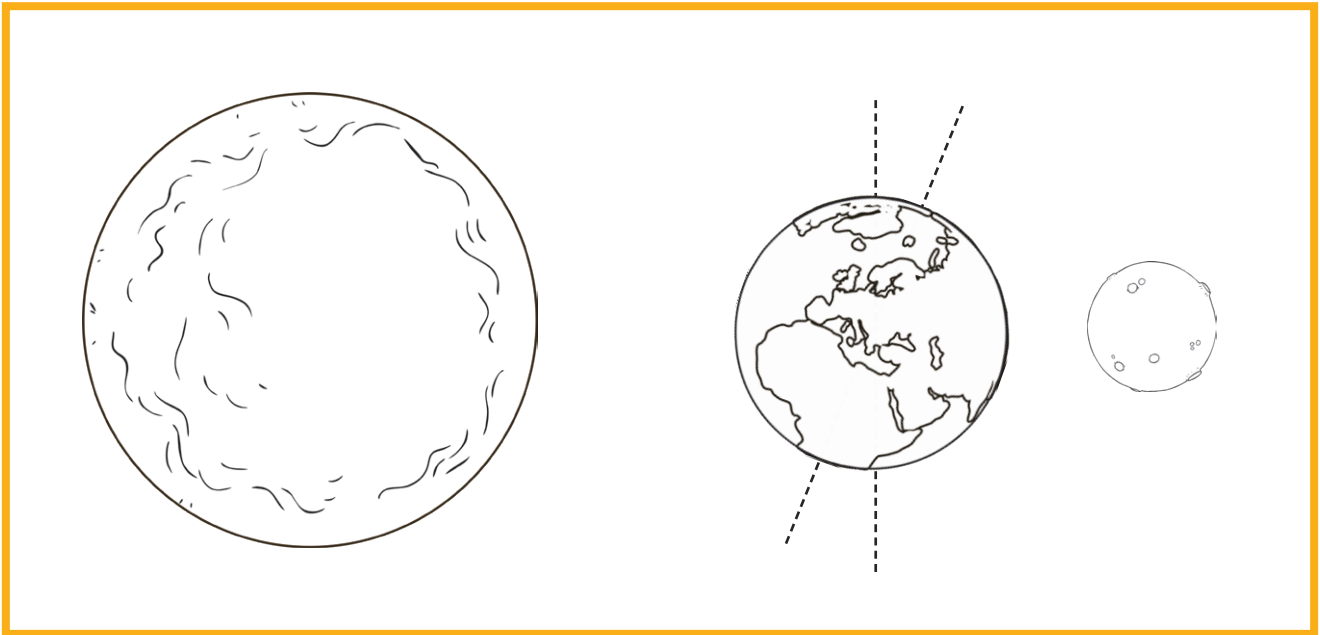
1. Label the **Earth**, **Sun** and **Moon** on the picture.
2. Can you explain why we have daytime and night-time? Use the word bank to help you!

Word Bank

Earth Sun light daytime night-time spins Moon

3. Colour in the picture to show which part of the Earth is in daytime and which part is in night-time.

Why Do We Have Day and Night?



1. Label the Earth, Sun and Moon on the picture.
2. Can you explain why we have daytime and night-time?

Word Bank

Earth Sun light daytime night-time spins axis Moon reflects

3. Colour in the picture to show which part of the Earth is in daytime and which part is in night-time.