
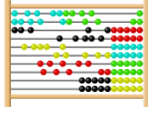



Name:

Date:.....

Numeracy focus task: number bonds for 2, 3, 4 and 5

$1 + 2 =$	$4 + 0 =$
$3 + 1 =$	$0 + 3 =$
$2 + 2 =$	$2 + 0 =$
$1 + 1 =$	$2 + 1 =$
$1 + 4 =$	$0 + 2 =$
$3 + 0 =$	$3 + 2 =$
$5 + 0 =$	$1 + 3 =$
$0 + 4 =$	$4 + 1 =$
$2 + 3 =$	$0 + 5 =$


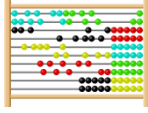

What strategy did you use?		✓ or ✗
	I used my fingers	
	I counted on	
	I knew and remembered the facts	

Name:

Date:

Numeracy focus task: number bonds for 6 and 7

$1 + 5 =$	$3 + 3 =$
$4 + 2 =$	$6 + 1 =$
$5 + 2 =$	$6 + 0 =$
$7 + 0 =$	$2 + 4 =$
$4 + 3 =$	$2 + 5 =$
$3 + 4 =$	$0 + 7 =$
$1 + 6 =$	$5 + 1 =$
$3 + 3 =$	$4 + 3 =$
$1 + 5 =$	$0 + 6 =$


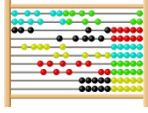

What strategy did you use?		✓ or ✗
	I used my fingers	
	I counted on	
	I knew and remembered the facts	

Name:

Date:

Numeracy focus task: number bonds for 8 and 9

$9 + 0 =$	$1 + 7 =$
$3 + 5 =$	$0 + 9 =$
$2 + 7 =$	$4 + 4 =$
$2 + 6 =$	$7 + 1 =$
$3 + 6 =$	$1 + 8 =$
$8 + 0 =$	$5 + 3 =$
$8 + 1 =$	$7 + 2 =$
$6 + 2 =$	$6 + 3 =$
$4 + 5 =$	$0 + 8 =$

What strategy did you use?		✓ or ✗
	I used my fingers	
	I counted on	
	I knew and remembered the facts	