



Add by Counting On


1. Match each image to a calculation and complete by counting on.

A.  +

D. $9 + 6 =$

B.  +

E. $10 + 3 =$

C.  +


F. $7 + 5 =$




VF
HW/Ext

2. Circle the one that is incorrect.


A.

17	
12	

B.

 + $= 15$

C.

 + $= 16$

D.

16	
13	



VF
HW/Ext

3. Tom and Alex are playing a board game.



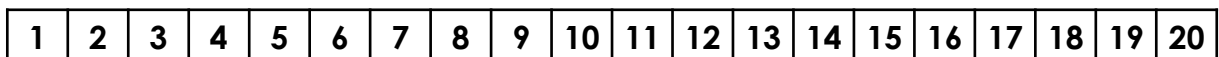
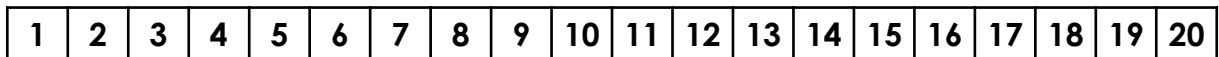
Tom

I was on 12.
I have rolled a 5.



Alex

I was on 9.
I have rolled a 6.





Use the number lines to work out who is in the lead. Explain your answer.





RPS
HW/Ext

Add by Counting On



4. Match each image to a calculation and complete by counting on.

A.  + 

D. $13 + 5 = \square$

B.  + 

E. $12 + 4 = \square$

C.  + 

F. $11 + 6 = \square$

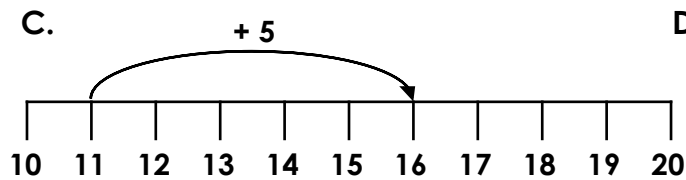
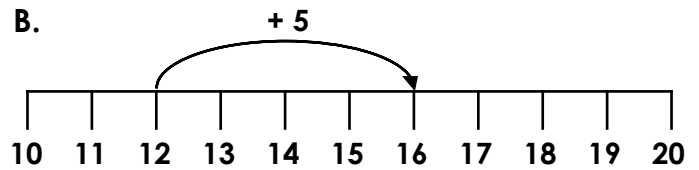


VF
HW/Ext

5. Circle the one that is incorrect.

A.

18	
11	7



D.


17	
14	3

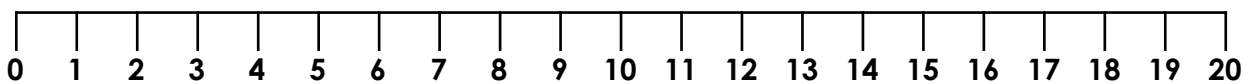


VF
HW/Ext

6. Beth and Sam are playing a board game.


Beth: I was on 9. I have rolled a 5.


Sam: I was on 7. I have rolled a 6.



Use the number line to work out who is in the lead. Explain your answer.



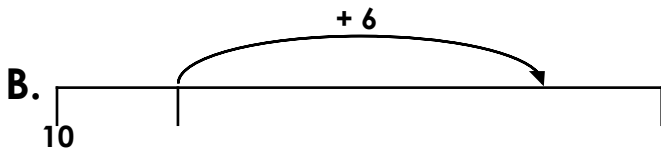
RPS
HW/Ext

Add by Counting On

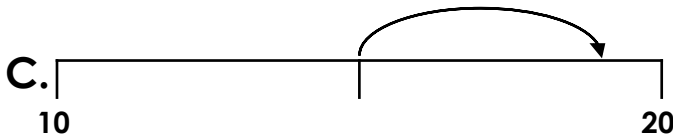
7. Count on to find the totals then join the matching pairs.



D. $12 + 6 = \square$



E. $15 + 4 = \square$



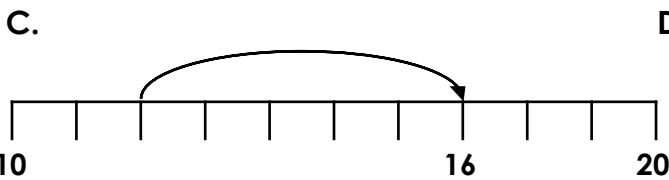
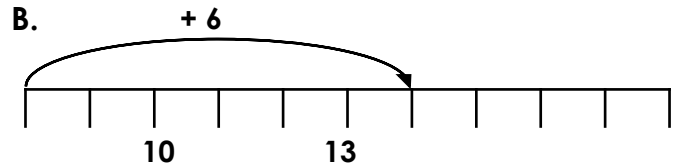
F. $\text{nine} + \text{eight} = \square$



VF
HW/Ext

8. Circle the one that is incorrect.

A. twelve count on seven = nineteen



D. eleven + seven = eighteen



VF
HW/Ext

9. Charlie and Tariq are playing a board game.



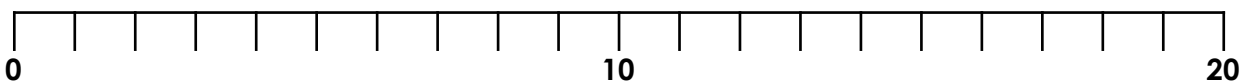
Charlie

I was on nine.
I have rolled a five.



Tariq

I was on eight.
I have rolled a six.



Use the number line to work out who is in the lead. Explain your answer.



RPS
HW/Ext

Homework/Extension Add by Counting On

Developing

1. A and E, $10 + 3 = 13$, B and F, $7 + 5 = 12$, C and D, $9 + 6 = 15$
2. C
3. 12 count on 5 is 17 and 9 count on 6 is 15 so Tom is in the lead.

Expected

4. A and E, $12 + 4 = 16$, B and D, $13 + 5 = 18$, C and F, $11 + 6 = 17$.
5. B
6. 9 count on 5 is 14 and 7 count on 6 is 13 so Beth is in the lead.

Greater Depth

7. A and F, nine + eight = 17, B and D, $12 + 6 = 18$, C and E, $15 + 4 = 19$
8. C
9. 9 count on 5 is 14 and 8 count on 6 is 14 so Charlie and Tariq are joint leaders.